



Total Questions : 35

Time : 1 hr.

PATTERN & MARKING SCHEME				
Section	(1) Logical Reasoning	(2) Mathematical Reasoning	(3) Everyday Mathematics	(4) Achievers Section
No. of Questions	10	10	10	5
Marks per Ques.	1	1	1	2

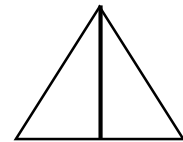
LOGICAL REASONING

1. Find the odd one.



2. How many triangles are there in the given shape?

- A. 2 B. 3 C. 1 D. 4



3. If 123 is coded for A B C then what will be the code for B A C ?

- A. 312 B. 132 C. 213 D. 231

4. U_____ W_____ Y Fill the blanks.

- A. VX C. XV C. ZW WZ

5. Find the first Wednesday of the month on which date ?

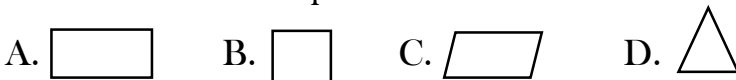
- A. 2 B. 1 C. 8 D. 12

WEEK	1	2	3	4	5
SUN	5	12	19	26	
MON	6	13	20	27	
TUE	7	14	21	28	
WED	1	8	15	22	29
THU	2	9	16	23	30
FRI	3	10	17	24	31
SAT	4	11	18	25	



6. 3, 5, 7, ____? ____

- A. 11 B. 9 C. 10 D. 6

7. Find the odd shape?



8. Which of the following option will complete the pattern in the figure?



9. Sleeping activity in which time of the day?

A. Night B. Morning C. Evening

D. None of these.



10. _____ equal groups of 4  can be formed from the given picture.

A. 5 B. 16 C. 4 D. 1



MATHEMATICAL REASONING

11. Find the missing number. 7, 14, 21, _____

A. 28 B. 22 C. 26 D. 32